

1 Complète comme l'exemple et indique combien il reste de poissons :

3 + 2 = 5

3

7 - 3 = 4

2

8 - 2 = 6

4

6 - 4 = 2

3

9 - 3 = 6

2 Dessine et indique combien de billes il y aura dans la boîte :

3 + 2 = 5

4

6 - 4 = 2

5

7 - 5 = 2

1

3 - 1 = 2

3

4 - 3 = 1

1 Complète comme l'exemple et indique combien il reste de pois :

3 + 2 = 5

3

7 - 3 = 4

4

9 - 4 = 5

1

7 - 1 = 6

5

7 - 5 = 2

2 Dessine et indique combien de billes il y aura dans la boîte :

3 + 2 = 5

4

6 - 4 = 2

5

5 - 2 = 3

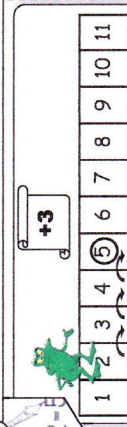
4


4 - 4 = 0

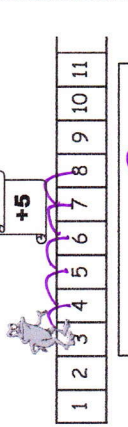
6

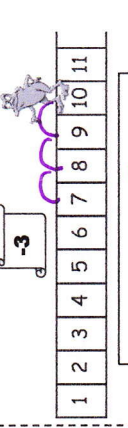
8 - 6 = 2

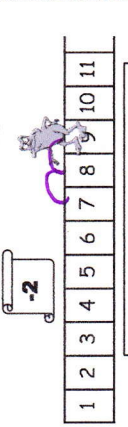
1 Complète et indique sur quelle case on va planter le drapeau :


$3+2=$  $2+3=5$

$7-3=4$ 

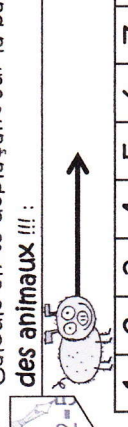
$3+5=8$  $3+5=8$

$10-3=7$ 

$9-2=7$  $9-2=7$

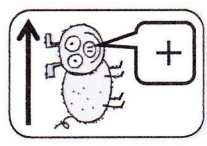
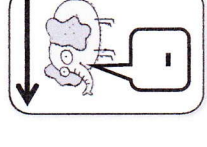
$6+4=10$ 

2 Calcule en te déplaçant sur la bande numérique, aide-toi des animaux !!! :

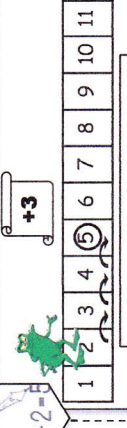
$7+3=10$  $7+3=10$

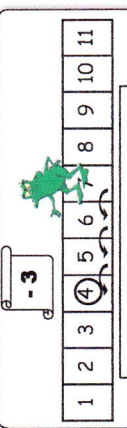
$4+4=8$ $3+2=5$ $1+5=6$ $2+5=7$

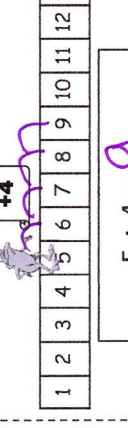
$6-3=3$ $8-2=6$ $4-3=1$ $6-5=1$ $8-1=7$

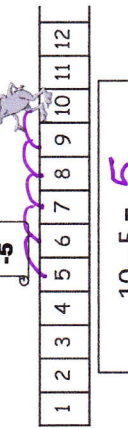
 

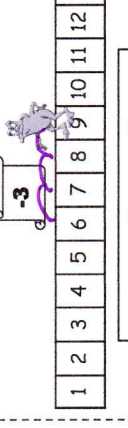
1 Complète et indique sur quelle case on va planter le drapeau :

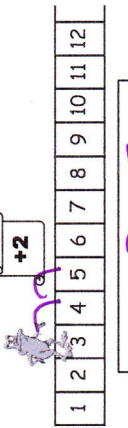
$3+2=$  $2+3=5$

$7-3=4$ 

$5+4=9$  $5+4=9$

$10-5=5$ 

$9-3=6$  $9-3=6$

$3+2=5$ 

2 Calcule en te déplaçant sur la bande numérique, aide-toi des animaux !!! :

$7+2=9$ $4+3=7$ $9+1=10$ $3+5=8$ $5+5=10$

$9-6=3$ $7-1=6$ $10-3=7$ $8-4=4$ $10-1=9$

